

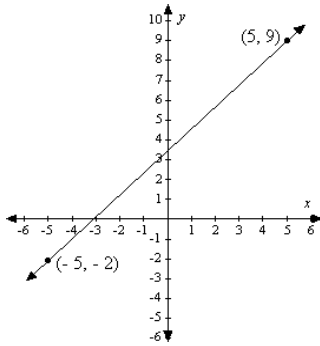
Student Name: _____

Class: _____

Date: _____

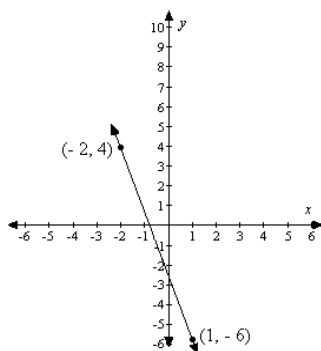
Instructions: **Read each question carefully and select the correct answer.**

1. Calculate the slope of the line between the points $(-5, -2)$ and $(5, 9)$.



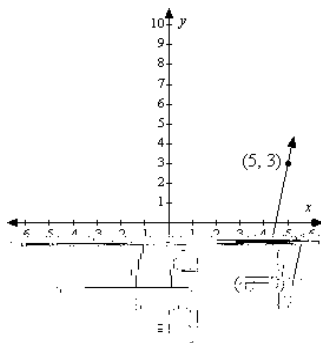
- A. $-\frac{10}{11}$
- B. $\frac{10}{11}$
- C. $\frac{11}{10}$
- D. $-\frac{11}{10}$

2. Calculate the slope of the line between the points $(-2, 4)$ and $(1, -6)$.



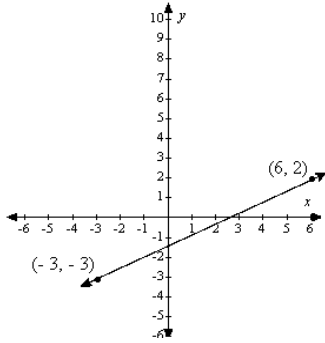
- A. $-\frac{10}{3}$
B. $-\frac{3}{10}$
C. $\frac{10}{3}$
D. $\frac{3}{10}$

3. Calculate the slope of the line between the points $(5, 3)$ and $(4, -3)$.



- A. $-\frac{1}{6}$
B. 6
C. 0
D. -6

4. Calculate the slope of the line between the points $(-3, -3)$ and $(6, 2)$.



- A. $\frac{5}{9}$
B. $\frac{9}{5}$
C. $-\frac{9}{5}$
D. $-\frac{1}{3}$